

RHYTHM ROCKERS

Unit #5 1/2

Review Round!


Fill in the note values for $\frac{4}{4}$ time:

Whole Note  = ____ beat(s)

Dotted Quarter Note  = ____ beat(s)

Dotted Half Note  = ____ beat(s)

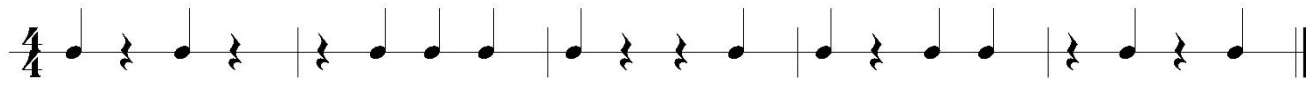
Quarter Note  = ____ beat(s)

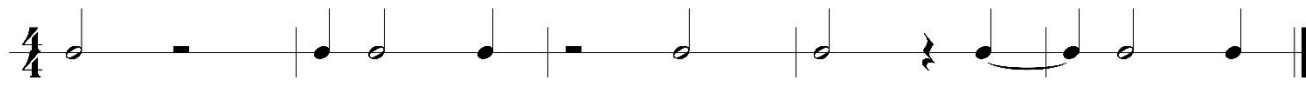
Half Note  = ____ beat(s)

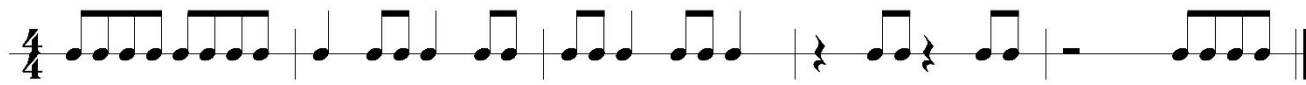
Eighth Note  = ____ beat(s)

Clap &
Count

Play

1 

2 

3 

4 

5 

6 

RHYTHM ROCKERS

Unit #8

Two Sixteenth Notes with an Eighth Note



This is an example of an _____ note. There are _____ of these notes in 1 quarter note.



This is an example of 2 _____ notes. When added together, these notes have the value of _____ eighth note(s) or _____ beat(s).



This is an example of _____ sixteenth note(s) and _____ eighth note(s).

Count 1 _ _ _

Clap &
Count

Play

1

2

3

4

5

RHYTHM ROCKERS

Unit #8 1/2

Eighth Note with Two Sixteenth Notes



This is an example of an _____ note. There are _____ of these notes in 1 quarter note.



This is an example of 2 _____ notes. When added together, these notes have the value of _____ eighth note(s) or _____ beat(s).



This is an example of _____ eighth note(s) and _____ sixteenth note(s).



Count | () _ _

Clap &
Count

Play

1

2

3

4

5

RHYTHM ROCKERS

Unit #9

Sixteenth Note with a Dotted Eighth Note



A small dot directly after a note adds $\frac{1}{2}$ the value of that note to itself.



This is an example of a dotted _____ note. The dot adds _____ beat(s) to the eighth note, therefore the value of this note is a total of _____ beat(s)



This is an example of 3 tied _____ notes. When added together, the notes have the value of _____ beat(s) or _____ dotted eighth note(s).



This is an example of 1 _____ note followed by 1 _____ note



Count 1 _ _ _

Clap &
Count

Play

1

2

3

4

5

RHYTHM ROCKERS

Unit #9 1/2

Dotted Eighth Note with a Sixteenth Note



A small dot directly after a note adds $\frac{1}{2}$ the value of that note to itself.



This is an example of a dotted _____ note. The dot adds _____ beat(s) to the eighth note, therefore the value of this note is a total of _____ beat(s)



This is an example of 3 tied _____ notes. When added together, the notes have the value of _____ beat(s) or _____ dotted eighth note(s).



This is an example of 1 _____ note followed by 1 _____ note



Count 1 () () _

Clap &
Count

Play

1

2

3

4

5